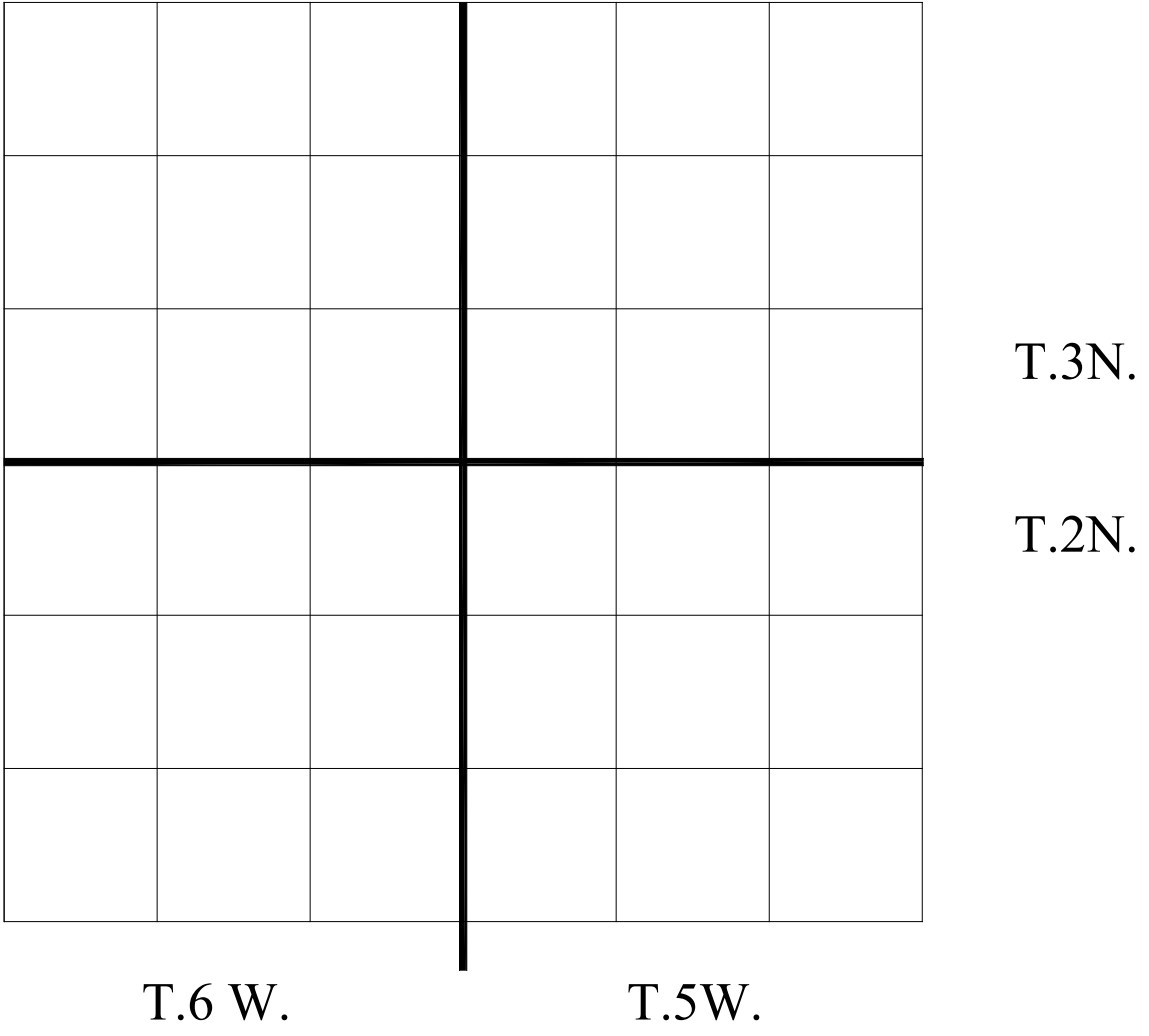


## Label the Townships and Ranges


- |          |          |
|----------|----------|
| A. _____ | E. _____ |
| B. _____ | F. _____ |
| C. _____ | G. _____ |
| D. _____ | H. _____ |

### Exercise 1



Section Numbering


Fill in the blanks with the  
Appropriate section number



## Rectangular System

1. Number the Government Lots along the north and west boundaries of the sections.
2. Write out the description for each shaded area.
3. Determine the approximate area for each parcel.

## Exercise 3



Rectangular System  
Plot the following descriptions:

1. NE  $\frac{1}{4}$  SE  $\frac{1}{4}$
2. NE  $\frac{1}{4}$  SW  $\frac{1}{4}$  NE  $\frac{1}{4}$
3. NW  $\frac{1}{4}$  NE  $\frac{1}{4}$  NW  $\frac{1}{4}$ , NE  $\frac{1}{4}$  NW  $\frac{1}{4}$  NW  $\frac{1}{4}$
4. SE  $\frac{1}{4}$  SW  $\frac{1}{4}$  NW  $\frac{1}{4}$ , NE  $\frac{1}{4}$  NW  $\frac{1}{4}$  SW  $\frac{1}{4}$ , NW  $\frac{1}{4}$  NE  $\frac{1}{4}$  SW  $\frac{1}{4}$
5. S  $\frac{1}{2}$  NW  $\frac{1}{4}$  SW  $\frac{1}{4}$  SE  $\frac{1}{4}$